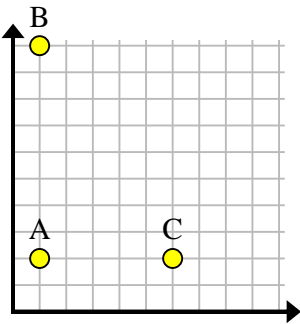


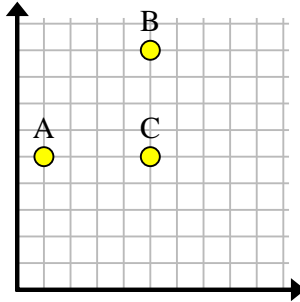


Find the coordinates of point D to make a rectangle.

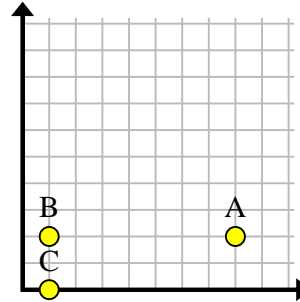
Ex)



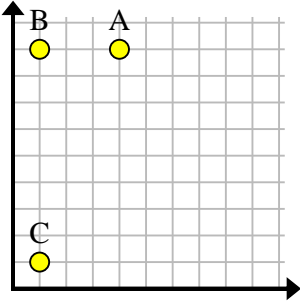
1)



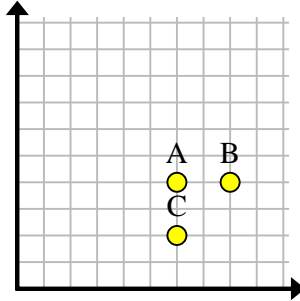
2)



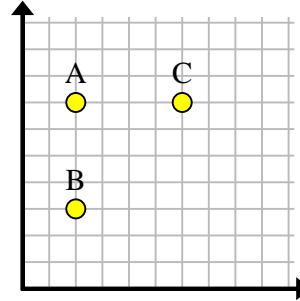
3)



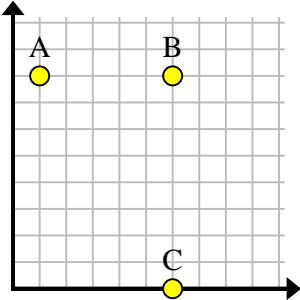
4)



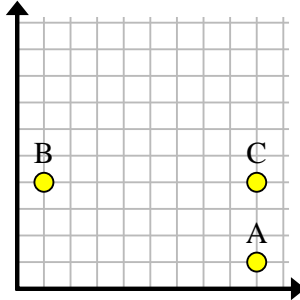
5)



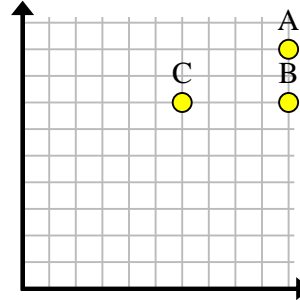
6)



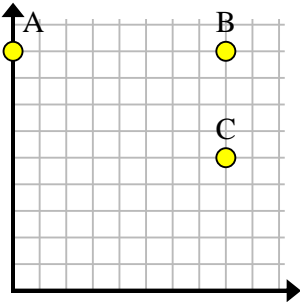
7)



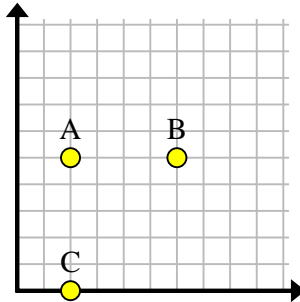
8)



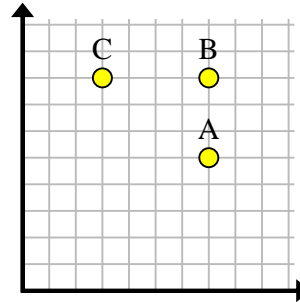
9)



10)



11)



Answers

Ex. **(6, 10)**

1. \_\_\_\_\_

2. \_\_\_\_\_

3. \_\_\_\_\_

4. \_\_\_\_\_

5. \_\_\_\_\_

6. \_\_\_\_\_

7. \_\_\_\_\_

8. \_\_\_\_\_

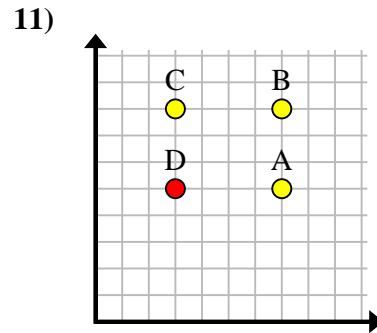
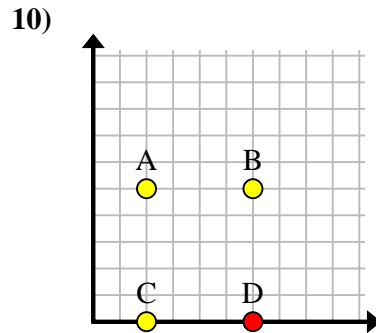
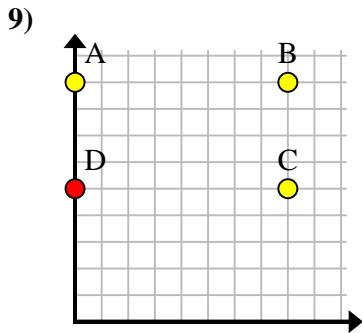
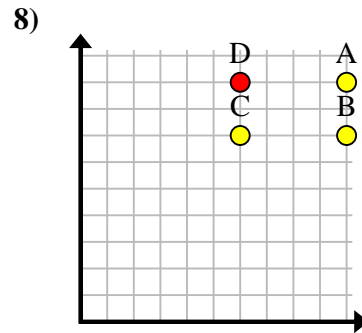
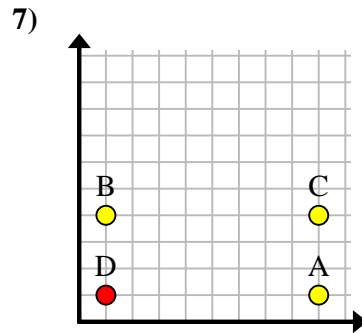
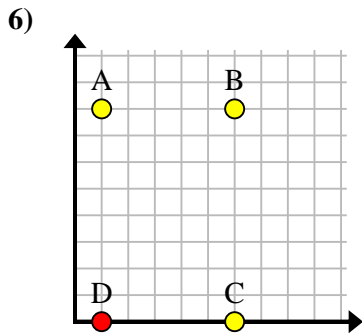
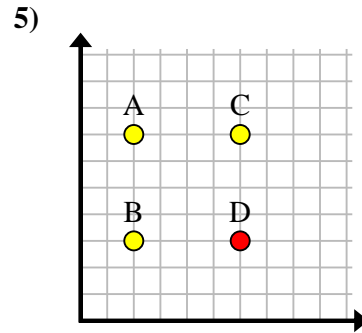
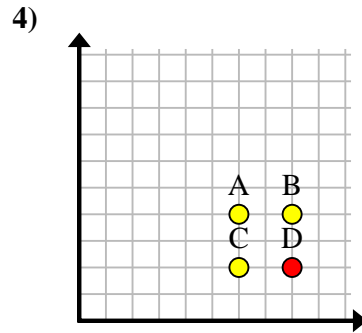
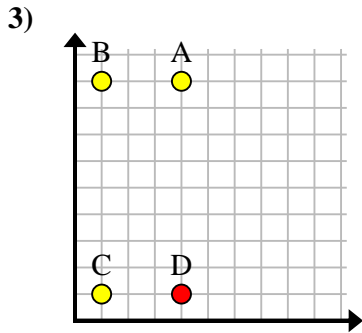
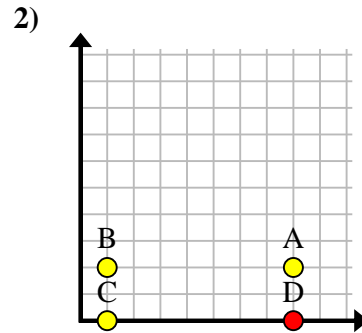
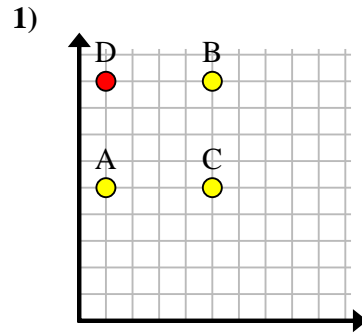
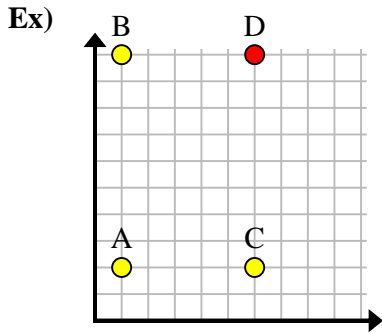
9. \_\_\_\_\_

10. \_\_\_\_\_

11. \_\_\_\_\_



Find the coordinates of point D to make a rectangle.



Answers

Ex. (6, 10)

1. (1, 9)

2. (8, 0)

3. (4, 1)

4. (8, 2)

5. (6, 3)

6. (1, 0)

7. (1, 1)

8. (6, 9)

9. (0, 5)

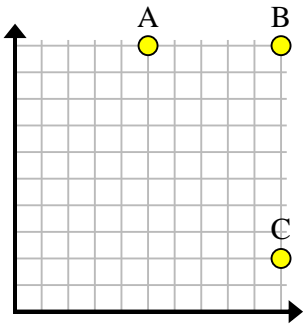
10. (6, 0)

11. (3, 5)

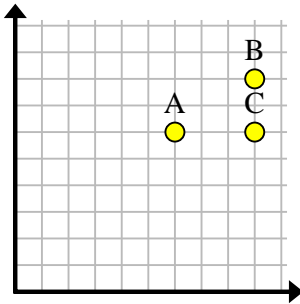


Find the coordinates of point D to make a rectangle.

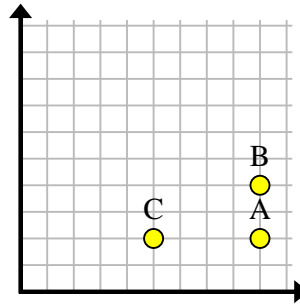
Ex)



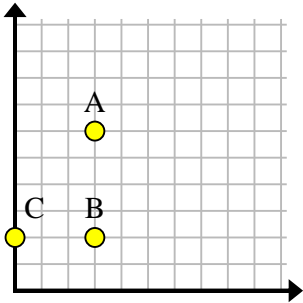
1)



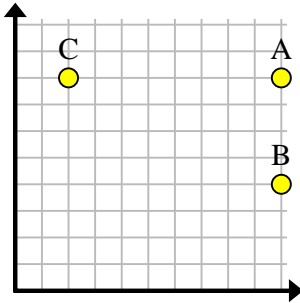
2)



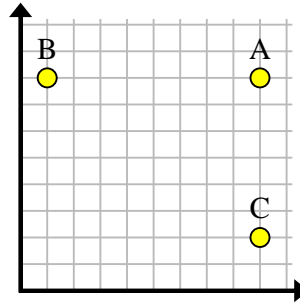
3)



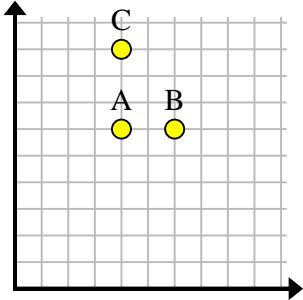
4)



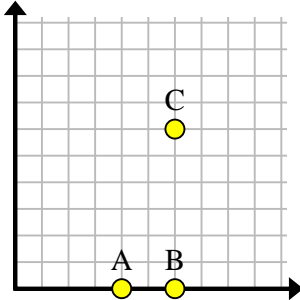
5)



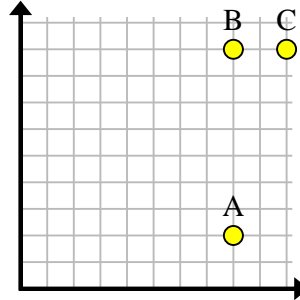
6)



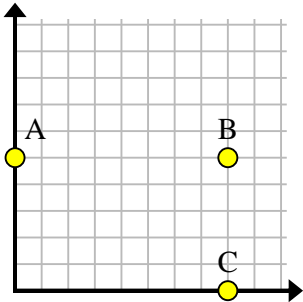
7)



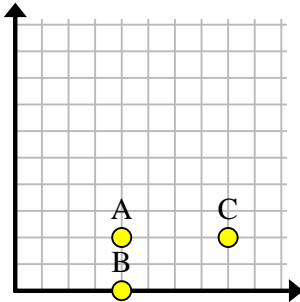
8)



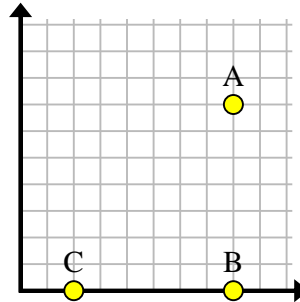
9)



10)



11)



Answers

Ex. **(5, 2)**

1. \_\_\_\_\_

2. \_\_\_\_\_

3. \_\_\_\_\_

4. \_\_\_\_\_

5. \_\_\_\_\_

6. \_\_\_\_\_

7. \_\_\_\_\_

8. \_\_\_\_\_

9. \_\_\_\_\_

10. \_\_\_\_\_

11. \_\_\_\_\_









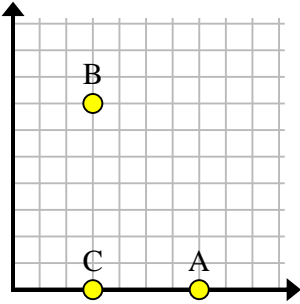




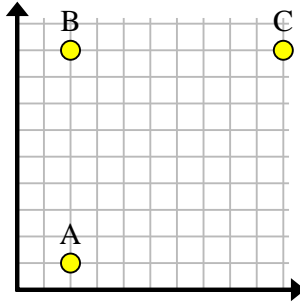


Find the coordinates of point D to make a rectangle.

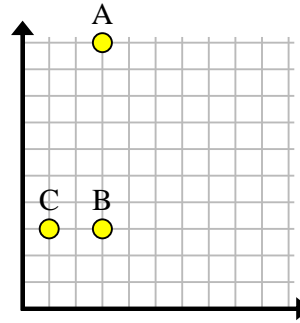
Ex)



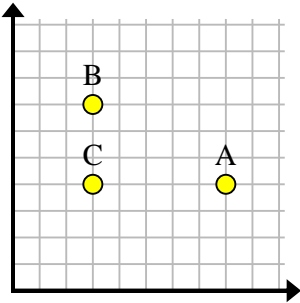
1)



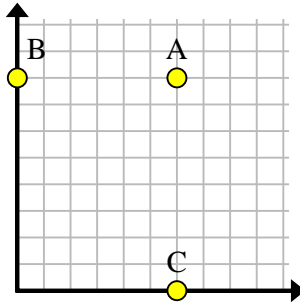
2)



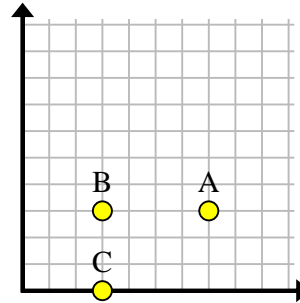
3)



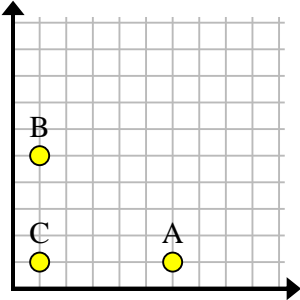
4)



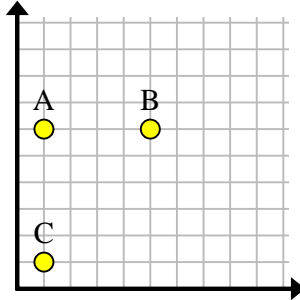
5)



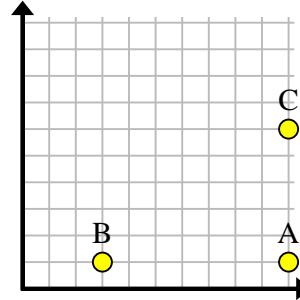
6)



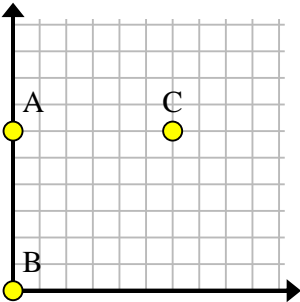
7)



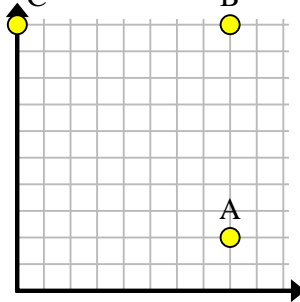
8)



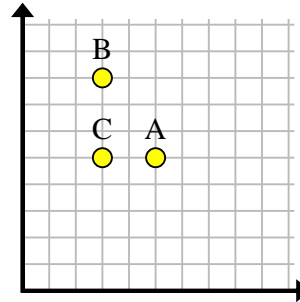
9)



10)



11)



Answers

Ex. (7, 7)

1. \_\_\_\_\_

2. \_\_\_\_\_

3. \_\_\_\_\_

4. \_\_\_\_\_

5. \_\_\_\_\_

6. \_\_\_\_\_

7. \_\_\_\_\_

8. \_\_\_\_\_

9. \_\_\_\_\_

10. \_\_\_\_\_

11. \_\_\_\_\_

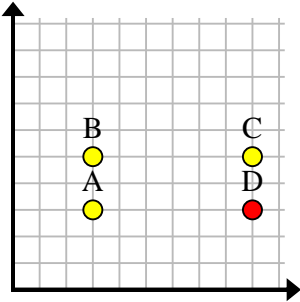




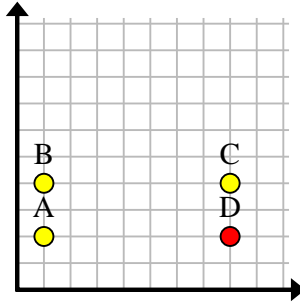


Find the coordinates of point D to make a rectangle.

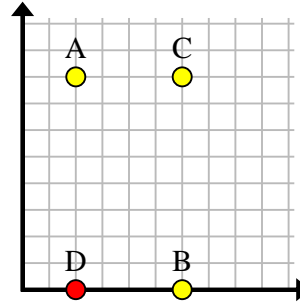
Ex)



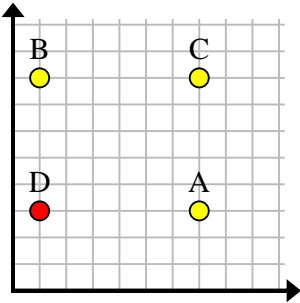
1)



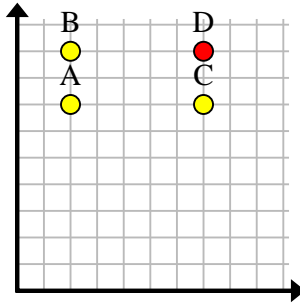
2)



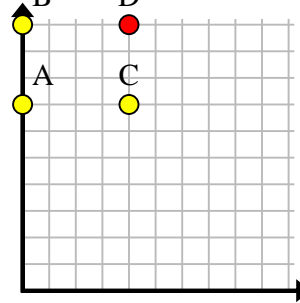
3)



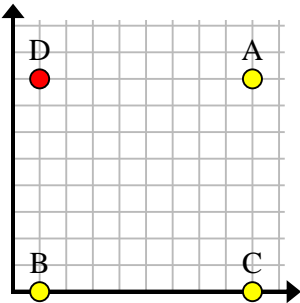
4)



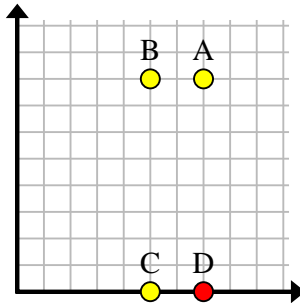
5)



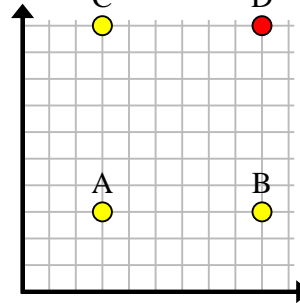
6)



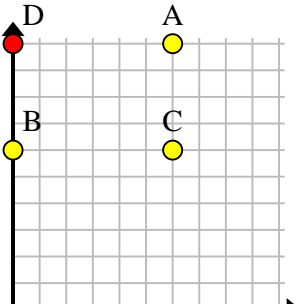
7)



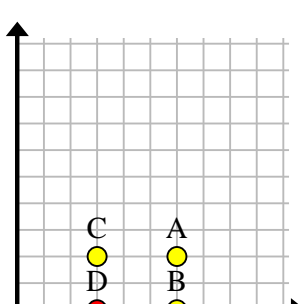
8)



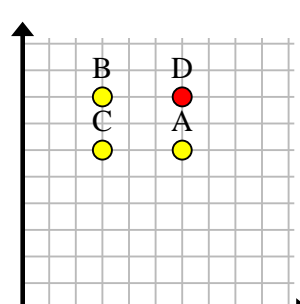
9)



10)



11)



Answers

Ex. (9, 3)

1. (8, 2)

2. (2, 0)

3. (1, 3)

4. (7, 9)

5. (4, 10)

6. (1, 8)

7. (7, 0)

8. (9, 10)

9. (0, 10)

10. (3, 0)

11. (6, 8)

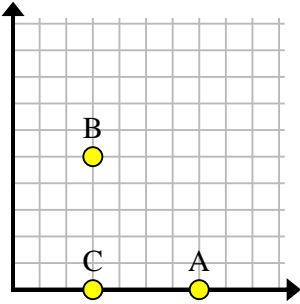




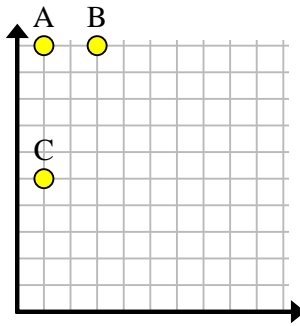


Find the coordinates of point D to make a rectangle.

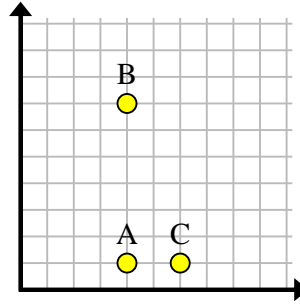
Ex)



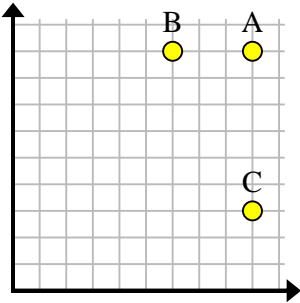
1)



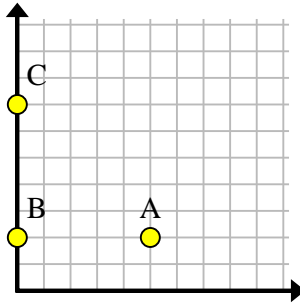
2)



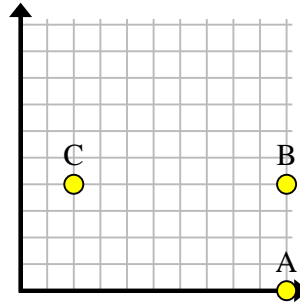
3)



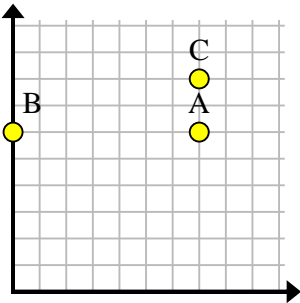
4)



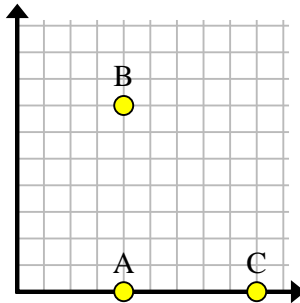
5)



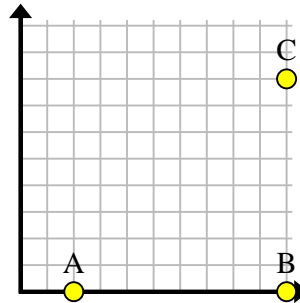
6)



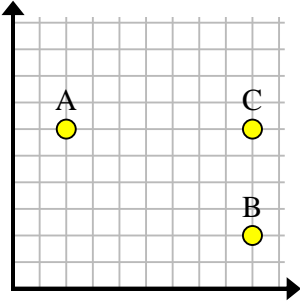
7)



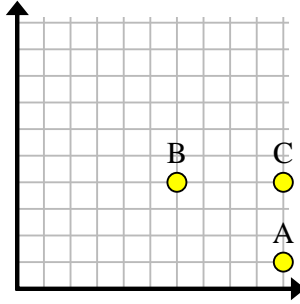
8)



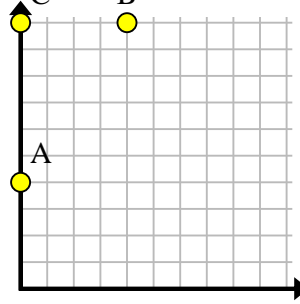
9)



10)



11)



Answers

Ex. (7,5)

1. \_\_\_\_\_

2. \_\_\_\_\_

3. \_\_\_\_\_

4. \_\_\_\_\_

5. \_\_\_\_\_

6. \_\_\_\_\_

7. \_\_\_\_\_

8. \_\_\_\_\_

9. \_\_\_\_\_

10. \_\_\_\_\_

11. \_\_\_\_\_





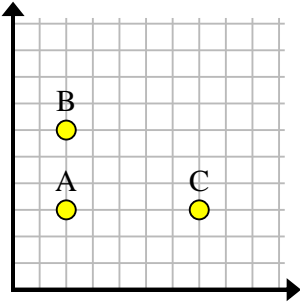




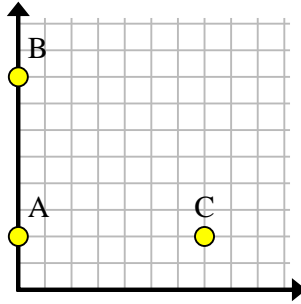


Find the coordinates of point D to make a rectangle.

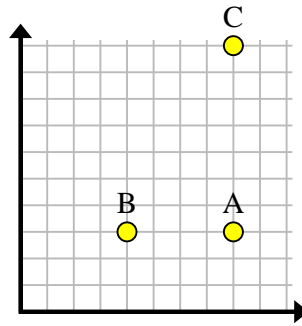
Ex)



1)



2)



**Answers**

Ex. (7, 6)

1. \_\_\_\_\_

2. \_\_\_\_\_

3. \_\_\_\_\_

4. \_\_\_\_\_

5. \_\_\_\_\_

6. \_\_\_\_\_

7. \_\_\_\_\_

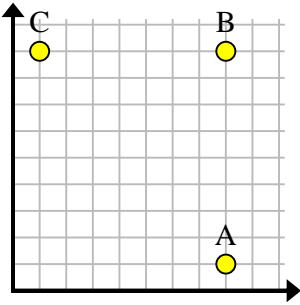
8. \_\_\_\_\_

9. \_\_\_\_\_

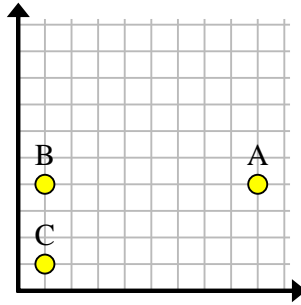
10. \_\_\_\_\_

11. \_\_\_\_\_

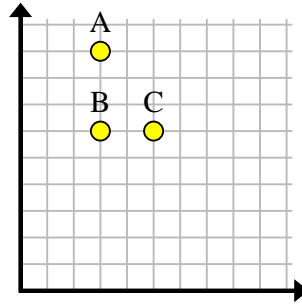
3)



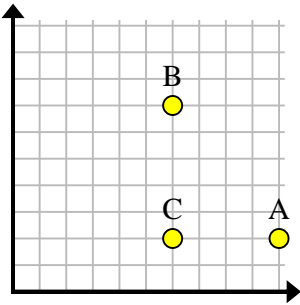
4)



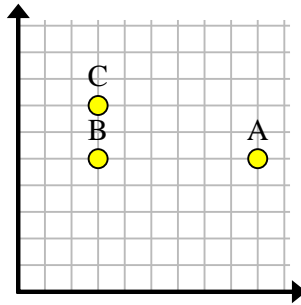
5)



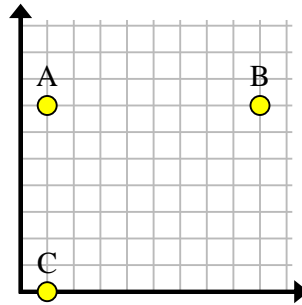
6)



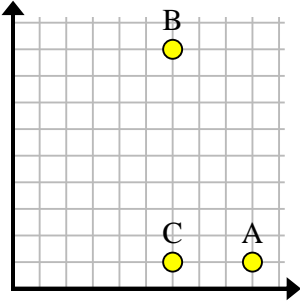
7)



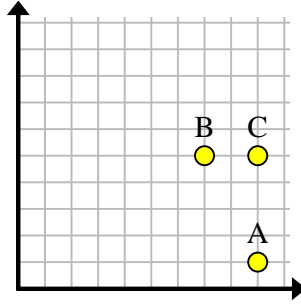
8)



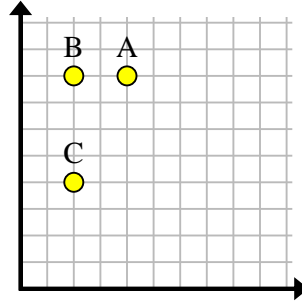
9)



10)



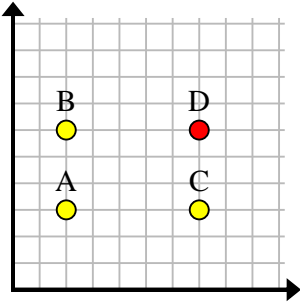
11)



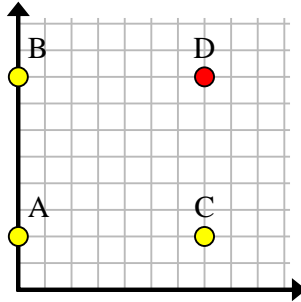


Find the coordinates of point D to make a rectangle.

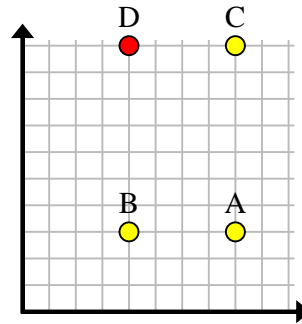
Ex)



1)



2)



Answers

Ex. (7, 6)

1. (7, 8)

2. (4, 10)

3. (1, 1)

4. (9, 1)

5. (5, 9)

6. (10, 7)

7. (9, 7)

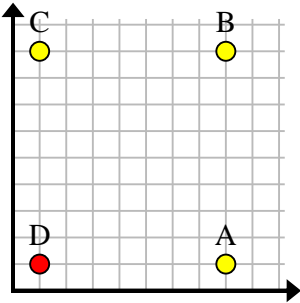
8. (9, 0)

9. (9, 9)

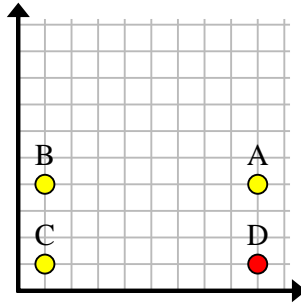
10. (7, 1)

11. (4, 4)

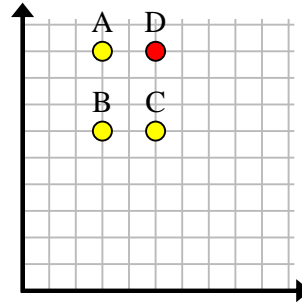
3)



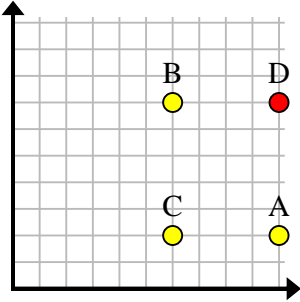
4)



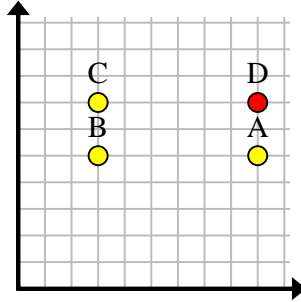
5)



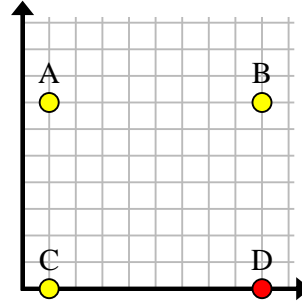
6)



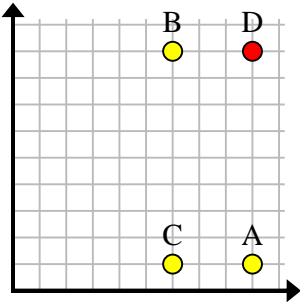
7)



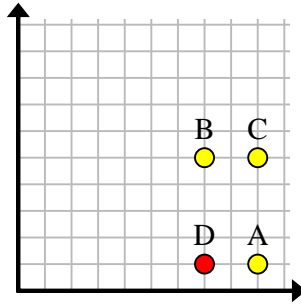
8)



9)



10)



11)

